



Solutions of JBMO 2012
Wednesday, June 27, 2012

Problem 1

Let a, b and c be positive real numbers such that $a+b+c=1$. Prove that

$$\frac{a}{b} + \frac{b}{a} + \frac{b}{c} + \frac{c}{b} + \frac{c}{a} + \frac{a}{c} + 6 \geq 2\sqrt{2} \left(\sqrt{\frac{1-a}{a}} + \sqrt{\frac{1-b}{b}} + \sqrt{\frac{1-c}{c}} \right)$$

When does equality hold?

Solution

Replacing $1-a, 1-b, 1-c$ with $b+c, c+a, a+b$ respectively on the right hand side, the given inequality becomes

$$\frac{b+c}{a} + \frac{c+a}{b} + \frac{a+b}{c} + 6 \geq 2\sqrt{2} \left(\sqrt{\frac{b+c}{a}} + \sqrt{\frac{c+a}{b}} + \sqrt{\frac{a+b}{c}} \right)$$

and equivalently

$$\left(\frac{b+c}{a} - 2\sqrt{2}\sqrt{\frac{b+c}{a}} + 2 \right) + \left(\frac{c+a}{b} - 2\sqrt{2}\sqrt{\frac{c+a}{b}} + 2 \right) + \left(\frac{a+b}{c} - 2\sqrt{2}\sqrt{\frac{a+b}{c}} + 2 \right) \geq 0$$

which can be written as

$$\left(\sqrt{\frac{b+c}{a}} - \sqrt{2} \right)^2 + \left(\sqrt{\frac{c+a}{b}} - \sqrt{2} \right)^2 + \left(\sqrt{\frac{a+b}{c}} - \sqrt{2} \right)^2 \geq 0,$$

which is true.

The equality holds if and only if

$$\frac{b+c}{a} = \frac{c+a}{b} = \frac{a+b}{c},$$

which together with the given condition $a+b+c=1$ gives $a=b=c=\frac{1}{3}$.

Problem 2

Let the circles k_1 and k_2 intersect at two distinct points A and B , and let t be a common tangent of k_1 and k_2 , that touches k_1 and k_2 at M and N , respectively. If $t \perp AM$ and $MN = 2AM$, evaluate $\angle NMB$.

Solution 1

Let P be the symmetric of A with respect to M (Figure 1). Then $AM = MP$ and $t \perp AP$, hence the triangle APN is isosceles with AP as its base, so $\angle NAP = \angle NPA$. We have $\angle BAP = \angle BAM = \angle BMN$ and $\angle BAN = \angle BNM$.

Thus we have

$$180^\circ - \angle NBM = \angle BNM + \angle BMN = \angle BAN + \angle BAP = \angle NAP = \angle NPA$$

so the quadrangle $MBNP$ is cyclic (since the points B and P lie on different sides of MN). Hence $\angle APB = \angle MPB = \angle MNB$ and the triangles APB and MNB are congruent ($MN = 2AM = AM + MP = AP$). From that we get $AB = MB$, i.e. the triangle AMB is isosceles, and since t is tangent to k_1 and perpendicular to AM , the centre of k_1 is on AM , hence AMB is a right-angled triangle. From the last two statements we infer $\angle AMB = 45^\circ$, and so $\angle NMB = 90^\circ - \angle AMB = 45^\circ$.

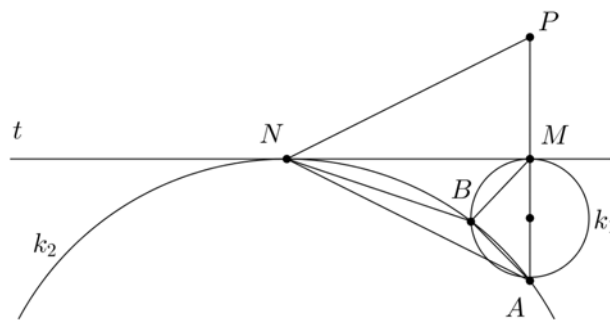


Figure 1

Solution 2

Let C be the common point of MN , AB (Figure 2). Then $CN^2 = CB \cdot CA$ and $CM^2 = CB \cdot CA$. So $CM = CN$. But $MN = 2AM$, so $CM = CN = AM$, thus the right triangle ACM is isosceles, hence $\angle NMB = \angle CMB = \angle BCM = 45^\circ$.

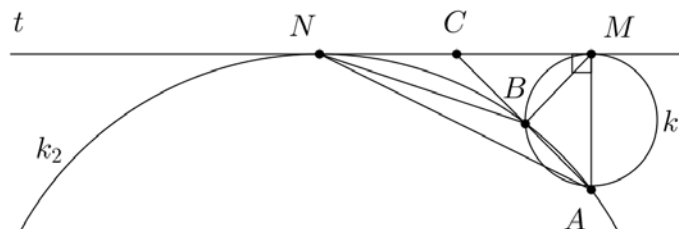


Figure 2

Problem 3

On a board there are n nails each two connected by a string. Each string is colored in one of n given distinct colors. For each three distinct colors, there exist three nails connected with strings in these three colors. Can n be

- a) 6? b) 7?

Solution. (a) The answer is no.

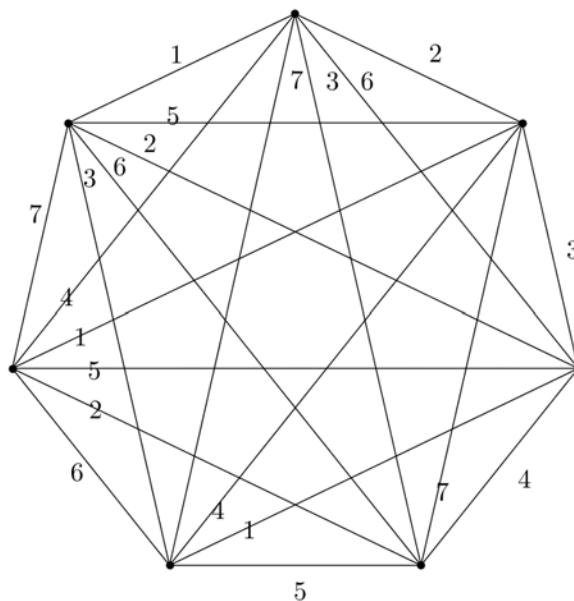
Suppose it is possible. Consider some color, say blue. Each blue string is the side of 4 triangles formed with vertices on the given points. As there exist $\binom{5}{2} = \frac{5 \cdot 4}{2} = 10$ pairs

of colors other than blue, and for any such pair of colors together with the blue color there exists a triangle with strings in these colors, we conclude that there exist at least 3 blue strings (otherwise the number of triangles with a blue string as a side would be at most $2 \cdot 4 = 8$, a contradiction). The same is true for any color, so altogether there

exist at least $6 \cdot 3 = 18$ strings, while we have just $\binom{6}{2} = \frac{6 \cdot 5}{2} = 15$ of them.

(b) The answer is yes

Put the nails at the vertices of a regular 7-gon and color each one of its sides in a different color. Now color each diagonal in the color of the unique side parallel to it. It can be checked directly that each triple of colors appears in some triangle (because of symmetry, it is enough to check only the triples containing the first color).



Remark. The argument in (a) can be applied to any even n . The argument in (b) can be applied to any odd $n = 2k + 1$ as follows: first number the nails as $0, 1, 2, \dots, 2k$ and similarly number the colors as $0, 1, 2, \dots, 2k$. Then connect nail x with nail y by a string of color $x + y \pmod{n}$. For each triple of colors (p, q, r) there are vertices x, y, z connected by these three colors. Indeed, we need to solve \pmod{n} the system

$$(*) \quad (x + y \equiv p, x + z \equiv q, y + z \equiv r)$$

Adding all three, we get $2(x + y + z) \equiv p + q + r$ and multiplying by $k + 1$ we get $x + y + z \equiv (k + 1)(p + q + r)$. We can now find x, y, z from the identities $(*)$.

Problem 4

Find all positive integers x, y, z and t such that

$$2^x \cdot 3^y + 5^z = 7^t.$$

Solution

Reducing modulo 3 we get $5^z \equiv 1$, therefore z is even, $z = 2c, c \in \mathbb{N}$.

Next we prove that t is even:

Obviously, $t \geq 2$. Let us suppose that t is odd, say $t = 2d + 1, d \in \mathbb{N}$. The equation becomes $2^x \cdot 3^y + 25^c = 7 \cdot 49^d$. If $x \geq 2$, reducing modulo 4 we get $1 \equiv 3$, a contradiction. And if $x = 1$, we have $2 \cdot 3^y + 25^c = 7 \cdot 49^d$ and reducing modulo 24 we obtain

$$2 \cdot 3^y + 1 \equiv 7 \pmod{24} \Rightarrow 24 \mid 2(3^y - 3), \text{ i.e. } 4 \mid 3^{y-1} - 1$$

which means that $y - 1$ is even. Then $y = 2b + 1, b \in \mathbb{N}$. We obtain $6 \cdot 9^b + 25^c = 7 \cdot 49^d$, and reducing modulo 5 we get $(-1)^b \equiv 2 \cdot (-1)^d$, which is false for all $b, d \in \mathbb{N}$. Hence t is even, $t = 2d, d \in \mathbb{N}$, as claimed.

Now the equation can be written as

$$2^x \cdot 3^y + 25^d = 49^d \Leftrightarrow 2^x \cdot 3^y = (7^d - 5^c)(7^d + 5^c).$$

As $\gcd(7^d - 5^c, 7^d + 5^c) = 2$ and $7^d + 5^c > 2$, there exist exactly three possibilities:

$$(1) \begin{cases} 7^d - 5^d = 2^{x-1} \\ 7^d + 5^d = 2 \cdot 3^y \end{cases}; \quad (2) \begin{cases} 7^d - 5^d = 2 \cdot 3^y \\ 7^d + 5^d = 2^{x-1} \end{cases}; \quad (3) \begin{cases} 7^d - 5^d = 2 \\ 7^d + 5^d = 2^{x-1} \cdot 3^y \end{cases}$$

Case (1)

We have $7^d = 2^{x-2} + 3^y$ and reducing modulo 3, we get $2^{x-2} \equiv 1 \pmod{3}$, hence $x - 2$ is even, i.e. $x = 2a + 2, a \in \mathbb{N}$, where $a > 0$, since $a = 0$ would mean $3^y + 1 = 7^d$, which is impossible (even = odd).

We obtain

$$7^d - 5^d = 2 \cdot 4^a \xRightarrow{\text{mod } 4} 7^d \equiv 1 \pmod{4} \Rightarrow d = 2e, e \in \mathbb{N}.$$

Then we have

$$49^e - 5^d = 2 \cdot 4^a \xRightarrow{\text{mod } 8} 5^c \equiv 1 \pmod{8} \Rightarrow c = 2f, f \in \mathbb{N}.$$

We obtain $49^e - 25^f = 2 \cdot 4^a \xRightarrow{\text{mod } 3} 0 \equiv 2 \pmod{3}$, false. In conclusion, in this case there are no solutions to the equation.

Case (2)

From $2^{x-1} = 7^d + 5^c \geq 12$ we obtain $x \geq 5$. Then $7^d + 5^c \equiv 0 \pmod{4}$, i.e. $3^d + 1 \equiv 0 \pmod{4}$, hence d is odd. As $7^d = 5^c + 2 \cdot 3^y \geq 11$, we get $d \geq 2$, hence $d = 2e + 1, e \in \mathbb{N}$.

As in the previous case, from $7^d = 2^{x-2} + 3^y$ reducing modulo 3 we obtain $x = 2a + 2$ with $a \geq 2$ (because $x \geq 5$). We get $7^d = 4^a + 3^y$ i.e. $7 \cdot 49^e = 4^a + 3^y$, hence, reducing modulo 8 we obtain $7 \equiv 3^y$ which is false, because 3^y is congruent either to 1 (if y is even) or to 3 (if y is odd). In conclusion, in this case there are no solutions to the equation.

Case (3)

From $7^d = 5^c + 2$ it follows that the last digit of 7^d is 7, hence $d = 4k + 1, k \in \mathbb{N}$.

If $c \geq 2$, from $7^{4k+1} = 5^c + 2$ reducing modulo 25 we obtain $7 \equiv 2 \pmod{25}$ which is false. For $c = 1$ we get $d = 1$ and the solution $x = 3, y = 1, z = t = 2$.